



CEDAR GIRLS' SECONDARY SCHOOL
Preliminary Examination 2022
Secondary Four

CANDIDATE
NAME

CLASS

CLASS INDEX
NUMBER

CENTRE/
INDEX NO

MATHEMATICS

Paper 1

4048/01

29 August 2022

2 hours

Candidates answer on the Question Paper.

READ THESE INSTRUCTIONS FIRST

Write your index number and name on all the work you hand in.
 Write in dark blue or black pen.
 You may use an HB pencil for any diagrams or graphs.
 Do not use staples, paper clips, highlighters, glue or correction fluid.

Answer all questions.

If working is needed for any question it must be shown with the answer.
 Omission of essential working will result in loss of marks.
 The use of an approved scientific calculator is expected, where appropriate.
 If the degree of accuracy is not specified in the question, and if the answer is not exact, give the answer to three significant figures. Give answers in degrees to one decimal place.
 For π , use either your calculator value or 3.142, unless the question requires the answer in terms of π .

The number of marks is given in brackets [] at the end of each question or part question.
 The total of the marks for this paper is 80.

For Examiner's Use
80

This document consists of 20 printed pages.

[Turn over]

Mathematical Formulae**Compound interest**

$$\text{Total amount} = P \left(1 + \frac{r}{100} \right)^n$$

Mensuration

$$\text{Curved surface area of a cone} = \pi r l$$

$$\text{Surface area of a sphere} = 4\pi r^2$$

$$\text{Volume of a cone} = \frac{1}{3} \pi r^2 h$$

$$\text{Volume of a sphere} = \frac{4}{3} \pi r^3$$

$$\text{Area of triangle } ABC = \frac{1}{2} ab \sin C$$

$$\text{Arc length} = r\theta, \text{ where } \theta \text{ is in radians}$$

$$\text{Sector area} = \frac{1}{2} r^2 \theta, \text{ where } \theta \text{ is in radians}$$

Trigonometry

$$\frac{a}{\sin A} = \frac{b}{\sin B} = \frac{c}{\sin C}$$

$$a^2 = b^2 + c^2 - 2bc \cos A$$

Statistics

$$\text{Mean} = \frac{\sum fx}{\sum f}$$

$$\text{Standard deviation} = \sqrt{\frac{\sum fx^2}{\sum f} - \left(\frac{\sum fx}{\sum f} \right)^2}$$

3

Answer all the questions.

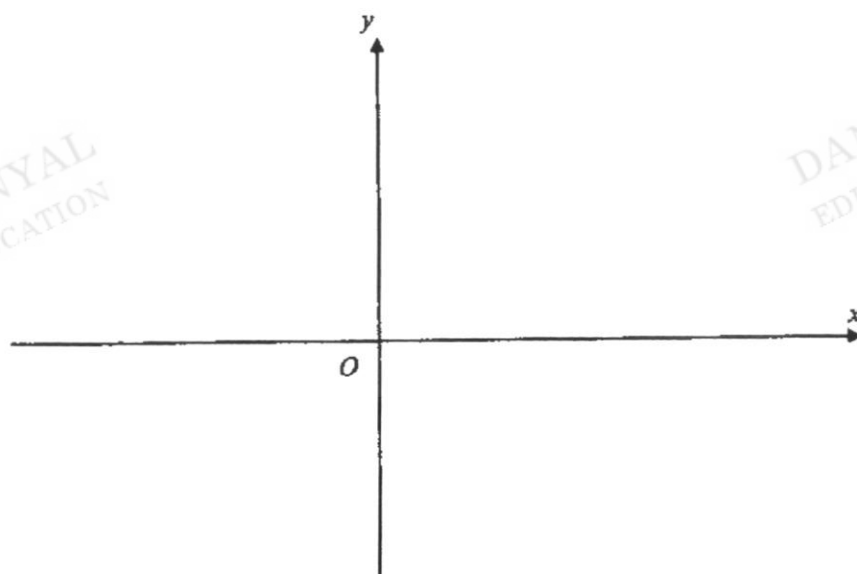
- 1 Simplify $0.5p \times 10^7 + 3 \times 10^6$, where $0 < p < 1$, leaving your answer in terms of p and in standard form.

Answer _____ [1]

- 2 (a) Express $x^2 - 6x + 18$ in the form $(x - p)^2 + q$.

Answer _____ [1]

- (b) Hence, sketch the graph of $y = x^2 - 6x + 18$ on the axes below. Indicate the turning point and any axial intercepts clearly.



[2]

4

3 $y = 12 - 6x^3$

(a) Find y when $x = -1$.

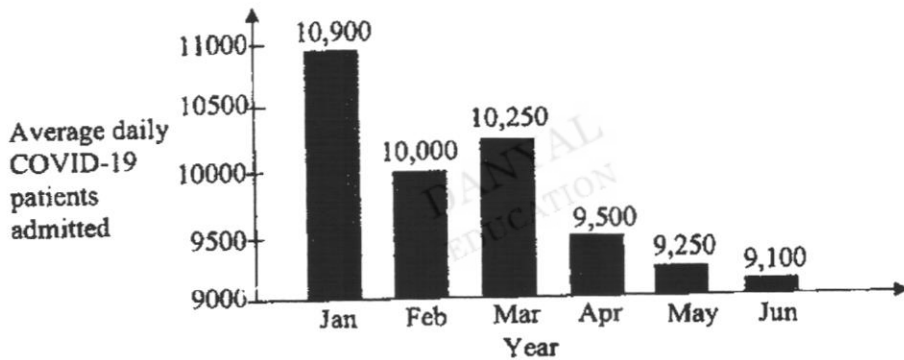
Answer [1]

(b) Rearrange the formula to make x the subject.

Answer [1]

4 The graph shows the average daily number of COVID-19 patients admitted into a particular hospital over a period of 6 months.

Rapid fall in COVID-19 patients admitted



(a) State one misleading feature of the graph.

.....
..... [1]

(b) Explain how this feature affects the reader's interpretation of the graph.

.....
..... [1]

5

5 (a) Write 9^{2x+1} as a power of 3.

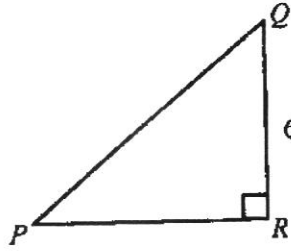
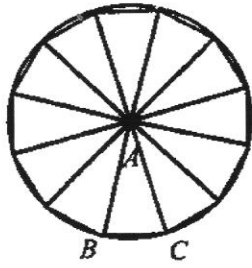
Answer [1]

(b) Simplify $\frac{9a^3}{4b} \times \left(\frac{27a^{\frac{2}{3}}b}{6}\right)^{-1}$.

Answer [2]

6

6



The diagram shows a regular 12- sided polygon inscribed in a circle and a right-angled triangle PQR with length $QR = 6$ cm .

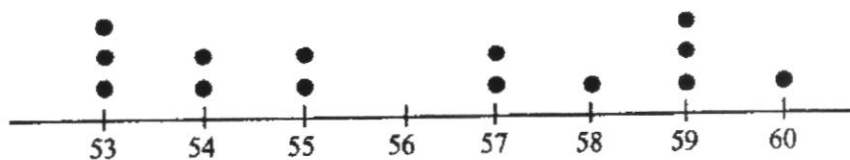
It is given that $\tan \angle QPR = \frac{3}{4}$.

The ratio of the area of triangle ABC : triangle PQR is 1 : 6.

Find the radius of the circle.

Answer cm [4]

7 The weights (in kg) of 14 students are measured and illustrated in the dot diagram.



Find

(a) the range of the weights,

Answer kg [1]

(b) the median weight,

Answer kg [1]

(c) the interquartile range of the weights.

Answer kg [2]

8

8 These are the first four terms of a sequence.

4 12 36 108

(a) Write down the 6th term of the sequence.

Answer _____ [1]

(b) Find an expression, in terms of n , for the n th term of the sequence.

Answer _____ [1]

(c) Justify whether 16 211 is a term of the sequence.

Answer _____

_____ [2]

9

- 9 Javelle went to a café and ordered a slice of cake and a cup of tea. Unfortunately, the receipt was stained and parts of it became unclear. The receipt for her meal is shown below.

Cake	\$ 5.80
Tea	\$ [REDACTED]
10% Service Charge	\$ [REDACTED]
7% Goods & Services Tax	\$ 0.65
Total	\$ [REDACTED]

Find the cost of the tea.

Answer \$ _____ [3]

10

- 10 Bernice invests \$700 at a rate of $r\%$ per year compound interest, compounded every 3 months.

At the end of 5 years the value of her investment is \$854.13, correct to 2 decimal places.

Calculate the value of r , correct to 3 significant figures.

Answer $r =$ _____ [3]

- 11 (a) $\xi = \{a, b, c, d, e, i, o, r, s, t, u, v\}$

$$A = \{c, e, d, a, r\}$$

$$B = \{v, i, c, t, o, r, a\}$$

Find

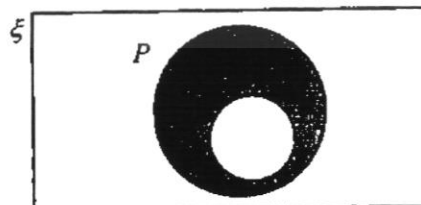
(i) $A \cap B$,

Answer _____ [1]

(ii) $A' \cap B'$.

Answer _____ [1]

- (b) Use set notation to describe the shaded region.



Answer _____ [1]

- 12 The area of a farm is represented on two maps, map *A* and map *B*.
 The area of this farm on Map *A* is sixteen times that of the area represented on Map *B*.
 Map *A* has a scale of 1 : 12 500.
 Find the scale of Map *B* in the form 1 : *n*.

Answer _____ [3]

- 13 Catherine ordered a basket of fruits containing apples, oranges and pears only.
 $\frac{5}{16}$ of the fruits are apples. 80% of the remaining fruits are oranges.
 The other 11 fruits are pears.

Find the number of apples in the basket.

Answer _____ apples [3]

12

- 14 (a) Express 7000 as a product of its prime factors, giving your answer in index form.

Answer _____ [2]

- (b) Two integers, A and B , can be written as products of prime factors.

$$A = p \times q^r \times 7 \qquad B = p^3 \times q^{r+1} \times 7$$

The lowest common multiple (LCM) of A and B is 7000.

- (i) Write down the value of p , q and r .

Answer $p =$ _____

$q =$ _____

$r =$ _____ [2]

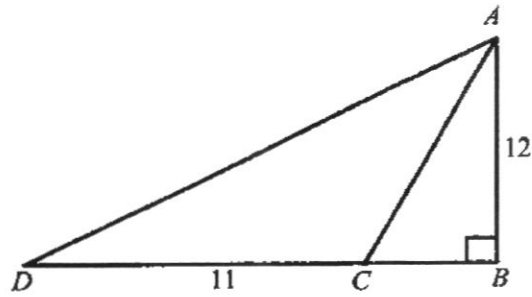
- (ii) Explain whether $H = 5^{2n+1} \times A$ is divisible by 125, where n is a whole number.

Answer _____

 _____ [2]

13

15



The diagram represents a tower, AB , build on horizontal ground.

The height of the tower is 12 m.

Point D is 11 m from C and DCB is a straight line.

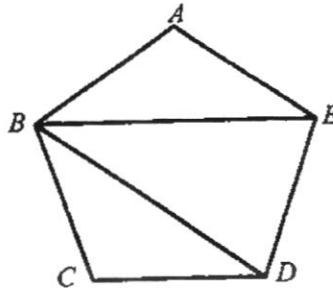
It is given that $\sin \angle ACB = \frac{12}{13}$.

Calculate the angle of depression in degrees of point D from the top of the tower.

Answer _____ = [4]

14

- 16 In the diagram $ABCDE$ is a regular pentagon.
 BE and BD are straight lines.



- (a) Find, giving reasons for each answer,

(i) angle ABE ,

Answer ° [2]

(ii) angle EBD .

Answer ° [1]

- (b) Explain why BE is parallel to CD .

Answer

.....
 [1]

15

(c) The sides AE and CD are produced to meet at X .

(i) Calculate angle DEX .

Answer _____ ° [1]

(ii) Explain why the quadrilateral $BDXE$ is a parallelogram.

Answer _____ [3]

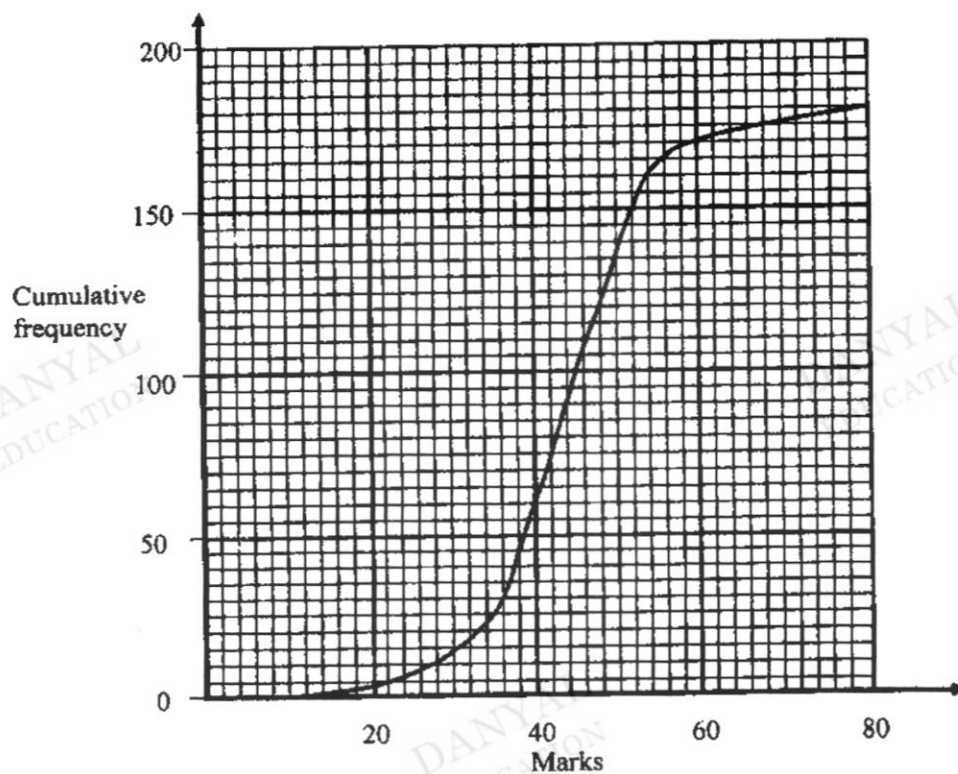
17 (a) Simplify $-9(5x+2y)-3(2x-y)$.

Answer _____ [2]

(b) Factorise completely $6ap+9aq-12bq-8bp$.

Answer _____ [2]

- 18 The cumulative frequency curve shows the distribution of marks scored by 180 students in a Mathematics examination in 2021. The maximum possible mark is 80.



- (a) $\frac{5}{6}$ of the students scored more than n marks in this exam.
Find n .

Answer [2]

- (b) To obtain the final mark of each student, the teacher divided the mark on the cumulative frequency curve by 2 and added the result by 15.
Find the number of students who had the final mark of 37 or less.

Answer [2]

- (c) The marks scored by another group of 180 students in the same mathematics examination has the same median but a larger standard deviation. Describe how the cumulative frequency curve for the new group of students will differ from that of the first group of students.

Answer _____

_____ [1]

- (d) Two of the students are chosen at random. Find the probability that one of the students scored less than or equal to 60 marks while the other student scored more than 60 marks.

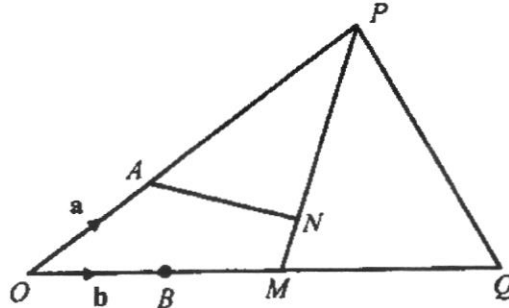
Answer [2]

18

19 In the diagram, $OA = \frac{1}{2}AP$ and $OB = \frac{1}{4}OQ$. M is the midpoint of OQ and

$MN = \frac{1}{4}NP$. OAP , OMQ and PNM are straight lines.

$\overrightarrow{OA} = \mathbf{a}$ and $\overrightarrow{OB} = \mathbf{b}$.



(a) Express, as simply as possible, in terms of \mathbf{a} and/or \mathbf{b} ,

(i) \overrightarrow{PM} ,

Answer _____ [1]

(ii) \overrightarrow{AN} ,

Answer _____ [1]

(iii) \overrightarrow{AQ} .

Answer _____ [1]

- (b) Show that A , N and Q will lie on a straight line.

Answer

- (c) State the ratio $AN : NQ$.

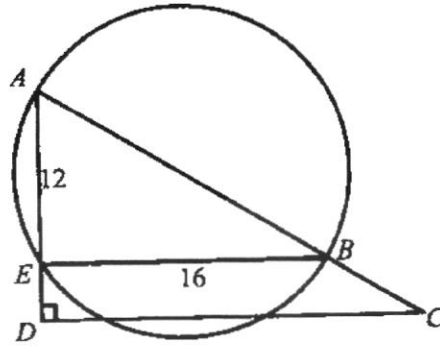
Answer _____ [2]

- (d) Find the value of $\frac{\text{Area of triangle } OPM}{\text{Area of triangle } OPQ}$.

Answer _____ [1]

20

- 20 In the diagram, AB is the diameter of the circle. AED and ABC are straight lines.
 $AE = 12$ cm and $EB = 16$ cm.
 $\angle ADC$ is a right angle.



- (a) Prove that triangles AEB and ADC are similar.

Answer _____ [2]

- (b) Given that the ratio of area of triangle AEB : area of triangle ADC is 4 : 9, find the length of CD .

Answer cm [2]

- (c) Find the area of trapezium $BCDE$.

Answer _____ cm^2 [2]



CEDAR GIRLS' SECONDARY SCHOOL
Preliminary Examination 2022
Secondary Four

CANDIDATE
NAME

CLASS

CLASS INDEX
NUMBER

CENTRE/
INDEX NO

MATHEMATICS

Paper 2

4048/02

30 August 2022

2 hours 30 minutes

Candidates answer on the Question Paper.

READ THESE INSTRUCTIONS FIRST

Write your Centre number, index number and name on all the work you hand in.
 Write in dark blue or black pen.
 You may use an HB pencil for any diagrams or graphs.
 Do not use staples, paper clips, glue or correction fluid.

Answer all the questions.

If working is needed for any question it must be shown with the answer.

Omission of essential working will result in loss of marks.

The use of an approved scientific calculator is expected, where appropriate.

If the degree of accuracy is not specified in the question, and if the answer is not exact, give the answer to three significant figures. Give answers in degrees to one decimal place.

For π , use either your calculator value or 3.142, unless the question requires the answer in terms of π .

The number of marks is given in brackets [] at the end of each question or part question.

The total number of marks for this paper is 100.

For Examiner's Use
100

This document consists of 21 printed pages and 1 blank page.

[Turn over

Mathematical Formulae**Compound interest**

$$\text{Total amount} = P \left(1 + \frac{r}{100} \right)^n$$

Mensuration

$$\text{Curved surface area of a cone} = \pi r l$$

$$\text{Surface area of a sphere} = 4\pi r^2$$

$$\text{Volume of a cone} = \frac{1}{3} \pi r^2 h$$

$$\text{Volume of a sphere} = \frac{4}{3} \pi r^3$$

$$\text{Area of triangle } ABC = \frac{1}{2} ab \sin C$$

$$\text{Arc length} = r\theta, \text{ where } \theta \text{ is in radians}$$

$$\text{Sector area} = \frac{1}{2} r^2 \theta, \text{ where } \theta \text{ is in radians}$$

Trigonometry

$$\frac{a}{\sin A} = \frac{b}{\sin B} = \frac{c}{\sin C}$$

$$a^2 = b^2 + c^2 - 2bc \cos A$$

Statistics

$$\text{Mean} = \frac{\sum fx}{\sum f}$$

$$\text{Standard deviation} = \sqrt{\frac{\sum fx^2}{\sum f} - \left(\frac{\sum fx}{\sum f} \right)^2}$$

3

Answer all the questions.

1 (a) Solve the inequality $\frac{x-5}{3} - \frac{2x-1}{2} \leq -1$.

Answer [3]

(b) Express as a single fraction in its simplest form $\frac{1}{x^2-4} - \frac{1}{x^2-x-6}$.

Answer [3]

4

- (c) Ally and Betty buy some pens and notebooks from the same shop.
 Ally buys 3 pens and 2 notebooks for \$4.80.
 Betty buys 5 pens and 4 notebooks for \$9.

- (i) Form a pair of simultaneous equations to represent this information.

Answer

- (ii) Solve the simultaneous equations to find the cost of a pen and the cost of a notebook. [1]

Answer

Cost of pen = \$

Cost of notebook = \$ [3]

- (d) p is inversely proportional to q^3 . When q is decreased by 50%, find the percentage change in p .

Answer% [3]

5

- 2 A fruit juice stall sells regular, medium and large glasses of apple and orange juice. The number of glasses of each type of juice that was sold on a particular morning are summarised in the following table.

	Regular (R)	Medium (M)	Large(L)
Apple Juice	20	30	11
Orange Juice	14	36	8

- (a) Represent the data in the table in a 2×3 matrix J .

Answer $J = \begin{pmatrix} & R & M & L \\ \text{Apple juice} & & & \\ \text{Orange juice} & & & \end{pmatrix}$ [1]

- (b) The cost price of each regular, medium and large glass of juice is \$1.50, \$2 and \$3 respectively.

The information can be represented in a 3×1 matrix $C = \begin{pmatrix} 1.5 \\ 2 \\ 3 \end{pmatrix}$.

- (i) Evaluate the matrix $M = JC$.

Answer $M =$ [2]

- (ii) State what each element of matrix M represents.

..... [1]

- (c) The profit from the sale of each regular, medium and large glass of juice is 80% of its cost price.

Using matrix multiplication, evaluate the total sales of the apple and orange juice of the stall on that particular morning.

Answer [3]

6

3 The point A is $(0, 7)$ and the point B is $(6, 9)$.

(a) Express \overline{AB} as a column vector.

Answer $\overline{AB} = \begin{pmatrix} \\ \end{pmatrix}$ [1]

(b) The equation of AB is $x + py + q = 0$.
Find the values of p and q .

Answer $p = \dots\dots\dots$ and $q = \dots\dots\dots$ [2]

(c) The point C is $(12, 2)$.

(i) M is the point on BC produced such that $\overline{BM} = 3\overline{CM}$.
Find the coordinates of M .

Answer $(\dots\dots\dots, \dots\dots\dots)$ [2]

(ii) Find the length of the line AC .

Answer $\dots\dots\dots$ units [1]

7

(d) The point D lies on the line AB produced.
The line CD is parallel to the y -axis.

(i) Find the coordinates of D .

DANYAL
EDUCATIONDANYAL
EDUCATION

Answer (.....,) [2]

(ii) Express \overline{AD} in terms of \overline{AB} .

DANYAL
EDUCATIONDANYAL
EDUCATIONDANYAL
EDUCATION

Answer $\overline{AD} = \dots\dots\dots$ [1]

8

- 4 The distances travelled per litre of petrol of 50 cars manufactured in Factory X are shown in the table below.

Distance per litre (x km)	$20 < x \leq 21$	$21 < x \leq 22$	$22 < x \leq 23$	$23 < x \leq 24$
Number of cars	9	13	17	11

- (a) Calculate an estimate of the mean of the data.

Answer km [1]

- (b) Calculate an estimate of the standard deviation of the data.

Answer km [1]

(c) The distances travelled per litre of petrol of 45 similar cars manufactured in Factory Y are tabulated in the same manner.
 The estimated mean and the standard deviation of the data are 22.5 km and 0.985 km.

(i) Make two comparisons between the distance travelled of cars manufactured by Factory X and by Factory Y.

Answer

(1)

(2) [2]

(ii) Another batch of 5 cars manufactured in Factory Y travelled between 22 km to 23 km on a litre of petrol.
 If this information is included in the data for the computation of the mean and standard deviation, state the effect on its

(a) mean,

Answer [1]

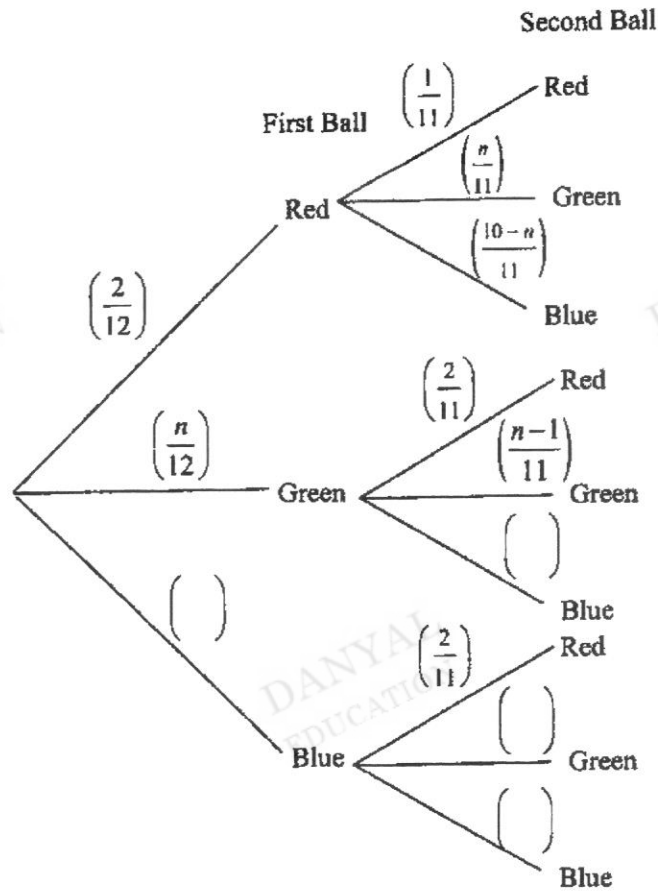
(b) standard deviation.

Answer [1]

10

- 5 A bag contains 12 balls.
 2 of the balls are red, n are green balls and the rest are blue balls.
 Eunice takes two balls from the bag, at random, without replacement.

(a) Complete the tree diagram.



[2]

- (b) The probability that Eunice takes two blue balls is $\frac{5}{22}$.

Write down an equation to represent this information and show that it simplifies to

$$n^2 - 19n + 60 = 0 .$$

Answer

[3]

11

- (c) Solve the equation $n^2 - 19n + 60 = 0$.

Answer $n = \dots\dots\dots$ or $\dots\dots\dots$ [3]

- (d) Explain why one of the solutions in part (c) must be rejected.

.....
 [1]

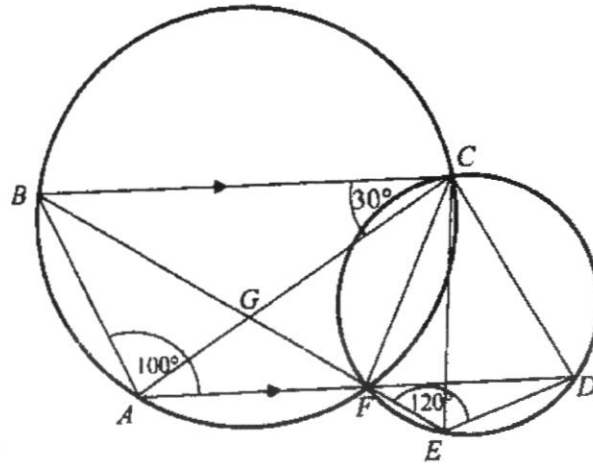
- (e) Find, as a fraction, in its simplest form, the probability that Eunice takes balls of different colours.

Answer [2]

- (f) In this round, Eunice takes two balls from the bag, at random, with replacement. Find, as a fraction, in its simplest form, the probability that she will take balls of the same colour.

Answer [2]

6 (a)



In the figure, circle $ABCF$ and circle $CDEF$ intersect at C and F .
 AFD and BFE are straight lines and BC is parallel to AD .
 Angle $ACB = 30^\circ$, angle $BAF = 100^\circ$ and angle $FED = 120^\circ$.

(i) Find, giving reasons for each answer,

(a) angle ACD ,

Answer^o [3]

(b) angle CDA .

Answer^o [2]

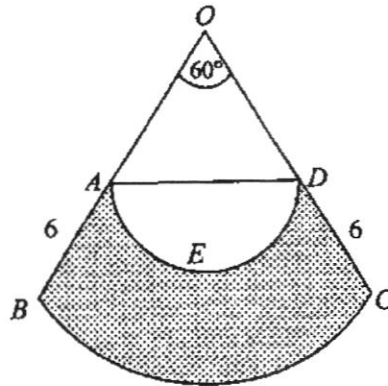
(ii) Prove that triangle BAG is congruent to triangle CFG .
 Give a reason for each statement you make.

.....

[3]

13

(b)



In the diagram, OBC is the sector of a circle, centre O , and angle $BOC = 60^\circ$. A and D are the midpoints of OB and OC respectively, and $AB = DC = 6$ cm. AED is a semicircle with AD as diameter.

- (i) Find the length of the arc BC in the form of $n\pi$ centimetres.

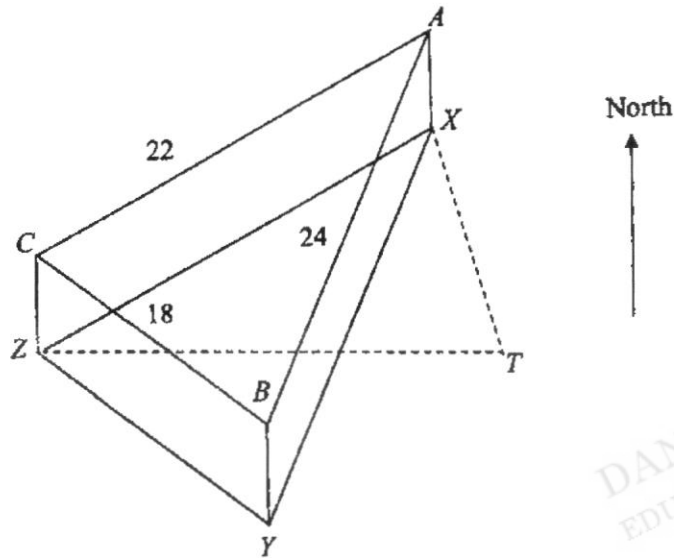
Answer cm [2]

- (ii) Find the area of the shaded region.

Answer cm^2 [4]

14

7



An aircraft waiting to land is flying around a triangular circuit ABC .
 A , B and C are vertically above three beacons, X , Y and Z respectively.
 T is the control tower at the airport, and T , X , Y and Z lie in a horizontal plane.
 $BC = 18$ km, $CA = 22$ km and $AB = 24$ km.

- (a) (i) The plane is flying at 200 km/h.
 Calculate the time, in minutes and seconds, that the aircraft takes to complete one round of circuit ABC .

Answer min s [2]

- (ii) Calculate the largest angle of triangle ABC .

Answer ° [3]

15

- (b) Z is due west of T .
The bearing of X from Z is 042° and the bearing of X from T is 338° .

- (i) Find angle ZXT .

Answer $^\circ$ [3]

- (ii) Calculate the distance of TX .

Answer km [2]

16

- 8 The number of bacteria in a colony doubles every hour.
 The colony starts with 50 bacteria.
 The table below shows the number of bacteria in the colony after time t .

Time in hours (t)	0	1	2	3	4	5	6	7
Number of bacteria (n)	50	100	200	400	800	1 600	3 200	6 400

- (a) On the grid opposite, draw the graph of n against t for $0 \leq t \leq 7$. [3]
- (b) (i) By drawing a tangent, find the gradient of the curve at $t = 5.5$.

Answer [2]

- (ii) State briefly what this gradient represents.

..... [1]

.....

- (c) The number of bacteria in another colony is given by the equation $n = 4\,000 - 500t$.

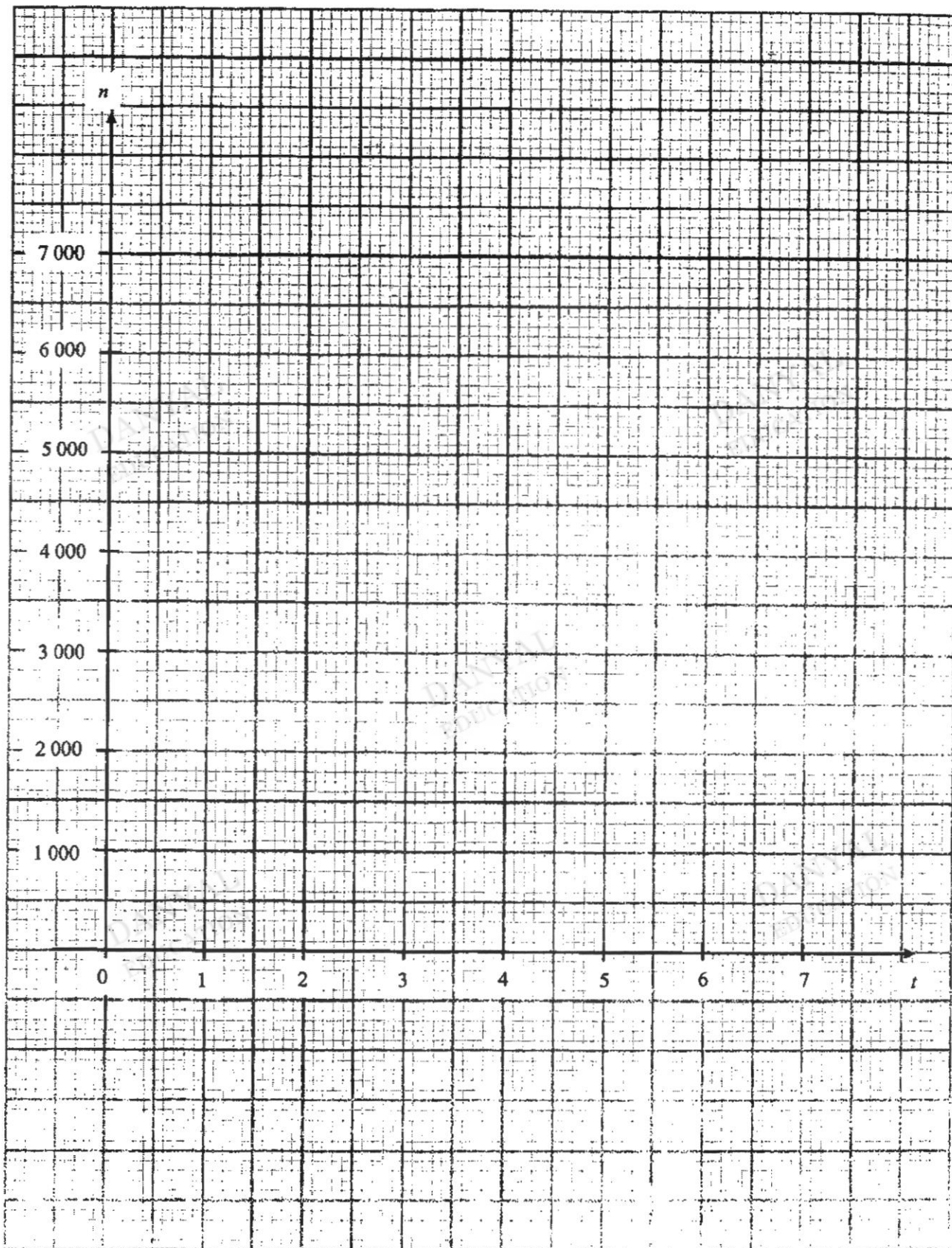
- (i) On the grid in part (a), draw a graph to represent the number of bacteria in this colony for $0 \leq t \leq 7$. [2]

- (ii) Find the value of t when the numbers in the colonies are equal.

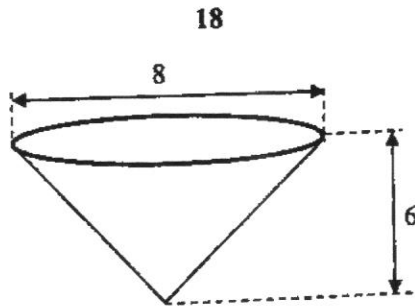
Answer [1]

- (d) Given that the equation of the first graph is $n = k2^t$, find the value of k .

Answer $k = \dots\dots\dots$ [1]



9



A paper cup is in the shape of an inverted cone.
 The diameter of the top of the cup is 8 cm.
 The height of the cone is 6 cm.
 The thickness of the paper is negligible.

(a) Calculate the curved surface area of the inside of the paper cup.

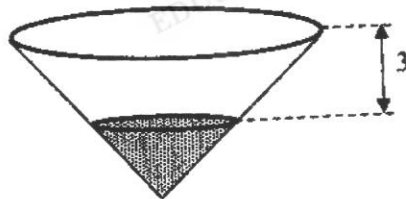
DANYAL
EDUCATION

DANYAL
EDUCATION

Answer

..... cm² [3]

(b)



Farah pours water into the paper cup.
 The surface of the water is 3 cm below the top of the paper cup.

DANYAL
EDUCATION

DANYAL
EDUCATION

(i) Farah thinks that the paper cup is filled to 50% of its total capacity.
 Explain why she is wrong.

.....
 [1]

19

- (ii) Calculate the percentage of the total capacity of the cup that is filled.

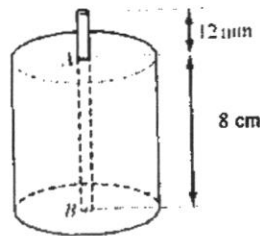
Answer % [1]

- (iii) Farah pours the water from this conical cup and it fills a hemispherical bowl completely.
Calculate the diameter of the hemispherical bowl.

Answer cm [3]

- 10 Gillian wants to make cylindrical soy wax candles as farewell gifts for 50 classmates and friends in school.

The diagram below shows one of the cylindrical candles she intends to make.



A is the centre of the top of the candle and B is the centre of the base of the candle. The cotton wick runs from B through A and extends 12 mm above A .

- (a) How many of these candles can be made using a 10 m length of cotton wick?

Answer [1]

- (b) The cotton wick is in the form of a solid cylinder. It has a diameter of 4 mm. Find the volume of the wick inside the candle from A to B .

Answer cm^3 [2]

Gillian makes one soy wax candle by putting the wick into a cylindrical jar. She will then pour the melted soy wax into the jar so that it surrounds the wick. The cylindrical jar has an internal radius of 2.9 cm.

- (c) Calculate the volume of soy wax needed to make each cylindrical candle.

Answer cm^3 [2]

Gillian's mum has the tools for candle-making and is willing to provide 50 cylindrical jars for her farewell gifts.

The following tables give online information that Gillian can use to buy the rest of the materials that she needs for making the 50 soy wax candles.

Cost of a box of soy wax	
Weight	Cost
250 g	\$4.40
500 g	\$8.25
1 kg	\$16
5 kg	\$64.73

Buy \$45 or more to enjoy free shipping.
Shipping fee is \$1.49.
Density of soy wax = 0.9 g/cm^3 .

Cost of 10 m length of cotton wick with a diameter of 4 mm (minimum length of purchase)	\$6.32
Shipping fee	\$1

Cost of 100 candle wick tab and sticker used to hold down the wick in the jar (fixed minimum number to purchase)	\$1.20
Shipping fee	\$1

Gillian's mum claims that each farewell gift will not cost Gillian more than \$3.

- (d) Is Gillian's mum claim correct?
Justify any decisions you make and show your calculations clearly.

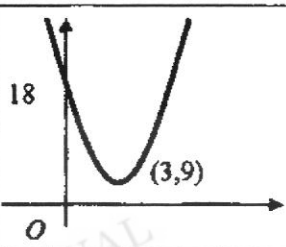
.....
..... [5]

End of Paper



CEDAR GIRLS' SECONDARY SCHOOL
SECONDARY 4 MATHEMATICS
Answer Key for 2022 Prelim Examination

PAPER 4048/1

1	$(5p+3) \times 10^6$	13	25 apples
2a	$(x-3)^2 + 9$	14a	$7000 = 2^3 \times 5^3 \times 7$
2b		14bi	$p = 2, q = 5, r = 2$
		14bii	$H = (14 \times 5^{2n}) \times 125$ For all whole numbers of n , H is a multiple of 125. Hence, H is divisible by 125. (accepts other valid answers)
3a	18	3b	$x = \sqrt[3]{\frac{12-y}{6}}$
4a	The axis does not start from zero etc		15
		16ai	$\angle ABE = 36^\circ$
		16aii	$\angle EBD = 36^\circ$
4b	It exaggerates the difference between the months etc (accepts other valid answers)		16b
			By Alternate angles, // lines BE is parallel to CD
5a	3^{4x+2}		16ci
			$\angle DEX = 72^\circ$
5b	$\frac{a^7}{2b^2}$		16cii
			Since BE is parallel to CD and BD is parallel to EX . There are 2 pairs of parallel lines. $BDXE$ is a parallelogram
6	$r = 4$		17a
			$-51x - 15y$
7a	7kg	7b	56kg
		7c	5kg
8a	$T_6 = 972$		17b
			$(3a - 4b)(3q + 2p)$
8b	$T_n = 4(3)^{n-1}$		18a
			$n = 36$
		18b	90 Students
8c	$T_n = 4(3)^{n-1} = 4w$ where w is an integer. Since the general term is an even number, 16 211 which is odd will not be a term of the sequence.		18c
			Cumulative frequency curve will have a wider spread/ gentler gradient.
		18d	$\frac{170}{1611}$
9	\$2.64 (to 2d.p)		19ai
			$2b - 3a$
		19aii	$\frac{8}{5}b - \frac{2}{5}a$
		19aiii	$-a + 4b$
10	$r = 4.00\%$ (to 3s.f)		19b
			Since $\overline{AN} = \frac{2}{5}\overline{AQ}$, $\overline{AN} \parallel \overline{AQ}$ and A is a common point A, N and Q will lie on a straight line.
11ai	$A \cap B = \{a, c, r\}$		19c
			$2 : 3$
11a(ii)	$A' \cap B' = \{b, u, s\}$		19d
			$\frac{1}{2}$
11b	$P \cap Q$		20a
			Since there are 2 pairs of equal and corresponding angles, By AA, triangles AEB and ADC are similar.
12	Scale of B = 1:50,000		20b
			$CD = 24$
		20c	120 cm^2



CEDAR GIRLS' SECONDARY SCHOOL
SECONDARY 4 MATHEMATICS
Answer Key for 2022 Preliminary Examination

PAPER 4048/02							
1a	$x \geq -\frac{1}{4}$	1b	$\frac{-1}{(x+2)(x-2)(x-3)}$	7ai	19 min 12 s	7aii	73.0°
1c	$3p + 2n = 4.8$ and $5p + 4n = 9$ Cost of pen = \$ 0.60, Cost of notebook = \$ 1.50			7bi	64°	7bii	17.6 km
1d	700%			8bi	Accept 1270 to 1870	8bii	The growth rate of bacteria is 1570 per h when $t = 5.5$.
2a	$J = \begin{pmatrix} 20 & 30 & 11 \\ 14 & 36 & 8 \end{pmatrix}$			8cii	Accept 4.8 to 5.2	8d	$k = 50$
2bi	$M = \begin{pmatrix} 123 \\ 117 \end{pmatrix}$			9a	90.6 cm^2	9bi	The volume of water in the cone is not proportional to the depth of water in the cone.
2bii	The cost price of apple juice and orange juice sold on a particular morning respectively.			9bii	12.5 %		
2c	$(1.8 \quad 1.8) \begin{pmatrix} 123 \\ 117 \end{pmatrix} = (432)$			9biii	3.63 cm		
3a	$\overline{AB} = \begin{pmatrix} 6 \\ 2 \end{pmatrix}$	3b	$p = -3$ and $q = 21$	10a	108		
3ci	(15, -1.5)	3cii	13 units	10b	1.01 cm^3		
3di	(12, 11)	3dii	$\overline{AD} = 2\overline{AB}$	10c	210 cm^3		
4a	22.1 km	4b	1.02 km	10d	Mass of wax $= 210.36 \times 0.9 \times 50 = 9466.2 \text{ g} = 9.4662 \text{ kg}$ Cost of soy wax = $\$64.73 \times 2 = \129.46 . No need for shipping fee as purchase $> \$45$		
4ci	As the mean distance $x <$ mean distance y , the cars made in Factory Y travel a greater distance per litre of petrol. As the Standard Deviation $y <$ Standard Deviation x , there is less spread/variation in the distance travelled per litre of petrol by cars made by Factory Y.				Cost of cotton wick = $\$6.32 + \1 (for shipping fee) = $\$7.32$ Cost of candle wick tab and sticker = $\$1.20 + \1 (for shipping fee) = $\$2.20$ Total cost of materials bought by Gillian = $\$129.46 + \$7.32 + \$2.20 = \138.98		
4cii(a)	unchanged	4cii(b)	reduced		Cost per candle = $\$138.98 + 50 = \$2.78 < \$3$ Gillian's mum claim is correct.		
5a	$\left(\frac{10-n}{12}\right), \left(\frac{10-n}{11}\right), \left(\frac{n}{11}\right), \left(\frac{9-n}{11}\right)$						
5b	$\frac{10-n}{12} \times \frac{9-n}{11} = \frac{5}{22}$						
5c	$n = 15$ or 4						
5d	As there are only 12 balls initially, n has to be less than 12, therefore $n = 4$.						
5e	$\frac{2}{3}$	5f	$\frac{7}{18}$				
6aia	110°	6aib	40°				
6aii	(1) $\angle BAG = \angle CFG$ or $\angle ABG = \angle FCG$ (Angles in the same segment) (2) $\angle BGA = \angle CGF$ (vert opp angles) (3) $AG = FG$ or $BG = GC$ (equal sides of isos $\triangle GAF$ or $\triangle GBC$ with proof) $\triangle BAG = \triangle CFG$ (SAA/SAS/AAS/ASA)						
6bi	$4\pi \text{ cm}$						
6bii	45.7 cm^2						